

Der Geometer ★ ★

1

2

3

4

5

6

7

8

9

10

11

12

13

14

15

Was muss ich machen ?

1/ Ich finde in der Liste, was ich messen soll.

2/ Ich wähle aus, mit welchem Instrument ich messen will. Ich kreuze das Instrument an.

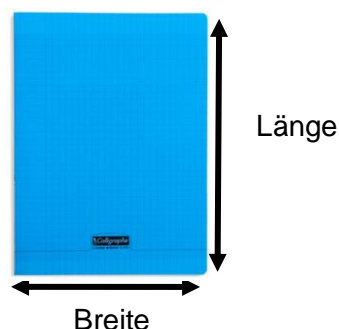
3/ Ich messe und schreibe die Länge auf, mit der Einheit die besser passt.

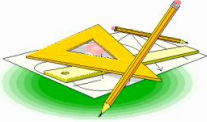

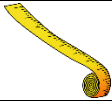

Wortschatzkiste :





Auswählen (wähle ... aus) = choisir

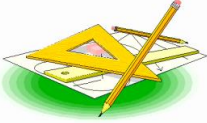



Breite = largeur





Länge = longueur







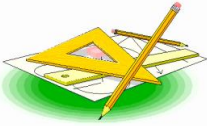



| | | | |
|---|---|---|---------------|
|  | Der Geometer | | 1 |
|  |  |  | A mißt : |
| <input type="checkbox"/> | <input type="checkbox"/> | <input type="checkbox"/> | |

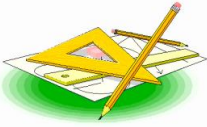

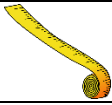

| | | | |
|---|---|---|---------------|
|  | Der Geometer | | 2 |
|  |  |  | B mißt : |
| <input type="checkbox"/> | <input type="checkbox"/> | <input type="checkbox"/> | |

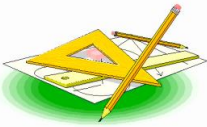



| | | | |
|---|---|---|--------------|
|  | Der Geometer | | 3 |
|  |  |  | C mißt: |
| <input type="checkbox"/> | <input type="checkbox"/> | <input type="checkbox"/> | |

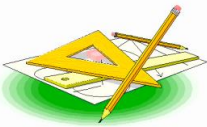



| | | | |
|---|---|---|--------------|
|  | Der Geometer | | 4 |
|  |  |  | D mißt: |
| <input type="checkbox"/> | <input type="checkbox"/> | <input type="checkbox"/> | |

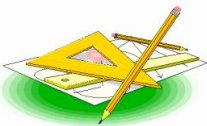

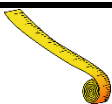

| | | | |
|---|---|---|---------------|
|  | Der Geometer | | 5 |
|  |  |  | E mißt : |
| <input type="checkbox"/> | <input type="checkbox"/> | <input type="checkbox"/> | |

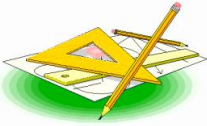



| | | | |
|---|---|---|---------------|
|  | Der Geometer | | 6 |
|  |  |  | F mißt : |
| <input type="checkbox"/> | <input type="checkbox"/> | <input type="checkbox"/> | |

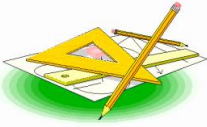

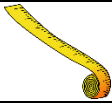

| | | | |
|---|---|---|---------------|
|  | Der Geometer | | 7 |
|  |  |  | G mißt : |
| <input type="checkbox"/> | <input type="checkbox"/> | <input type="checkbox"/> | |

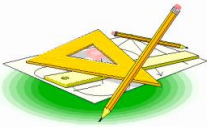



| | | | |
|---|---|---|---------------|
|  | Der Geometer | | 8 |
|  |  |  | H mißt : |
| <input type="checkbox"/> | <input type="checkbox"/> | <input type="checkbox"/> | |

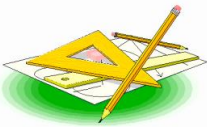



| | | | |
|---|---|---|---------------|
|  | Der Geometer | | 9 |
|  |  |  | I mißt : |
| <input type="checkbox"/> | <input type="checkbox"/> | <input type="checkbox"/> | |

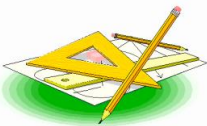

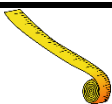

| | | | |
|---|---|---|---------------|
|  | Der Geometer | | 10 |
|  |  |  | J mißt : |
| <input type="checkbox"/> | <input type="checkbox"/> | <input type="checkbox"/> | |

| | | | |
|---|---|---|---------------|
|  | Der Geometer | | 11 |
|  |  |  | K mißt : |
| <input type="checkbox"/> | <input type="checkbox"/> | <input type="checkbox"/> | |

| | | | |
|---|---|---|---------------|
|  | Der Geometer | | 12 |
|  |  |  | L mißt : |
| <input type="checkbox"/> | <input type="checkbox"/> | <input type="checkbox"/> | |

| | | | |
|---|---|---|---------------|
|  | Der Geometer | | 13 |
|  |  |  | M mißt : |
| <input type="checkbox"/> | <input type="checkbox"/> | <input type="checkbox"/> | |

| | | | |
|---|---|---|---------------|
|  | Der Geometer | | 14 |
|  |  |  | N mißt : |
| <input type="checkbox"/> | <input type="checkbox"/> | <input type="checkbox"/> | |

| | | | |
|---|---|---|---------------|
|  | Der Geometer | | 15 |
|  |  |  | O mißt : |
| <input type="checkbox"/> | <input type="checkbox"/> | <input type="checkbox"/> | |

Liste für den Geometer

| | |
|----------|---|
| A | Gelbes Band. |
| B | Blaues Band. |
| C | Rotes Band. |
| D | Grünes Band. |
| E | Schwarzes Band. |
| F | Breite der Tür. |
| G | Distanz zwischen unserer Klasse und dem Saal 1. |
| H | Breite vom Fußballtor im Schulhof. |
| I | Breite der Klasse. |
| J | Länge vom kleinen gelben Heft. |
| K | Breite vom Tor. |
| L | Breite vom großen Schreibtisch. |
| M | Höhe von einem Stuhl. |
| N | Länge von einem Pinsel. |
| O | Länge von einem neuen Bleistift. |